

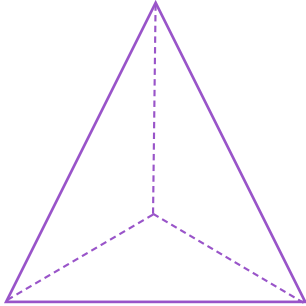


NAME _____ DATE _____

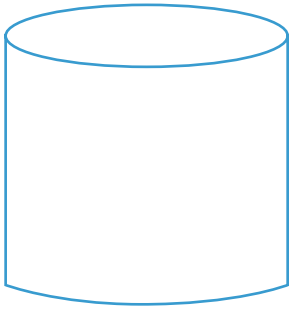
RELATING PLANAR AND SOLID FIGURES

Which 2 - dimensional shape can be obtained from this figure.

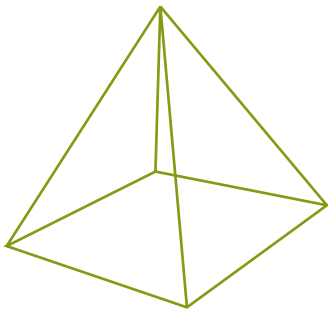
1)



2)



3)



4)

